

Non-Calculator

Q1.

$(3x + 1)(x - 2) + ax + b \equiv 3x^2 + 8x - 5$  Work out the values of  $a$  and  $b$ .

---

---

---

---

---

---

---

---

---

---

$a$

=.....

(Total 4 marks)

....

$b$

=.....

Q2.

Given that  $3x = 9x+1$  work out the value of  $x$ .

....

---

---

---

---

---

---

---

---

$x =$  \_\_\_\_\_

(Total 2 marks)

Q3.

- (a) Expand and simplify  $(6x - 1)(2x + 3)$

-----  
-----

Answer \_\_\_\_\_

(2)

- (b) Solve  $4x^2 + x - 3 = 0$

-----  
-----  
-----  
-----  
-----

Answer \_\_\_\_\_

(3)

(Total 5 marks)

### Calculator

Q4.

- (a) Factorise  $a^2 - 3a$

-----

Answer \_\_\_\_\_

(1)

- (b) Solve  $7y + 4 = 3(y + 6)$

-----  
-----  
-----

$y =$  \_\_\_\_\_

(3)

(Total 4 marks)

Q5.

- (a) Expand and simplify  $5(x - 3) - 3(x - 1)$

---

---

---

Answer \_\_\_\_\_

(3)

- (b) Solve the equation  $\frac{x + 2}{2} + \frac{2x + 1}{8} = 0$

---

---

---

---

---

$x =$  \_\_\_\_\_

(4)

(Total 7 marks)

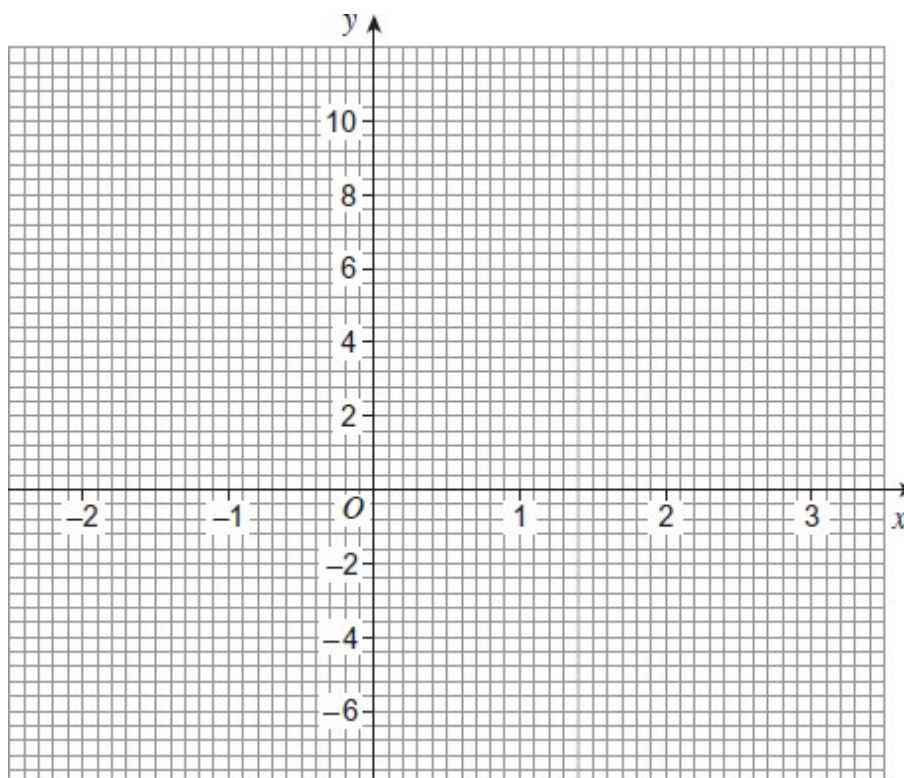
Q6.

(a) Complete the table of values for  $y = 2x^2 - x - 6$

$x$	-2	-1	0	1	2	3
$y$	4		-6	-5		9

(2)

(b) On this grid, plot the graph of  $y = 2x^2 - x - 6$  for values of  $x$  from -2 to 3



(2)

(c) Use your graph to find the solutions of the equation  $2x^2 - x - 6 = 0$

Answer \_\_\_\_\_ and \_\_\_\_\_

(2)

(Total 6 marks)

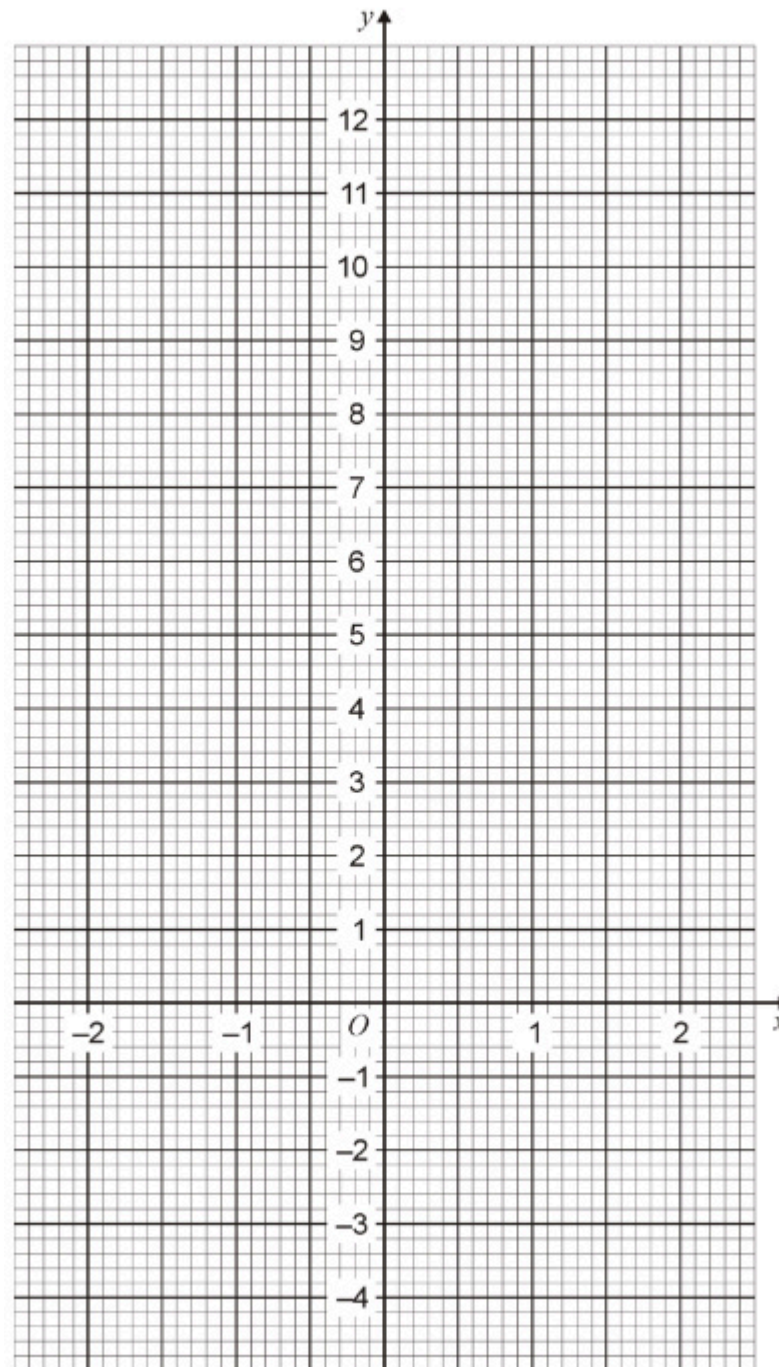
Q7.

Complete the table of values for  $y = x^3 + 4$

$x$	-2	-1	0	1	2
$y$		3	4		12

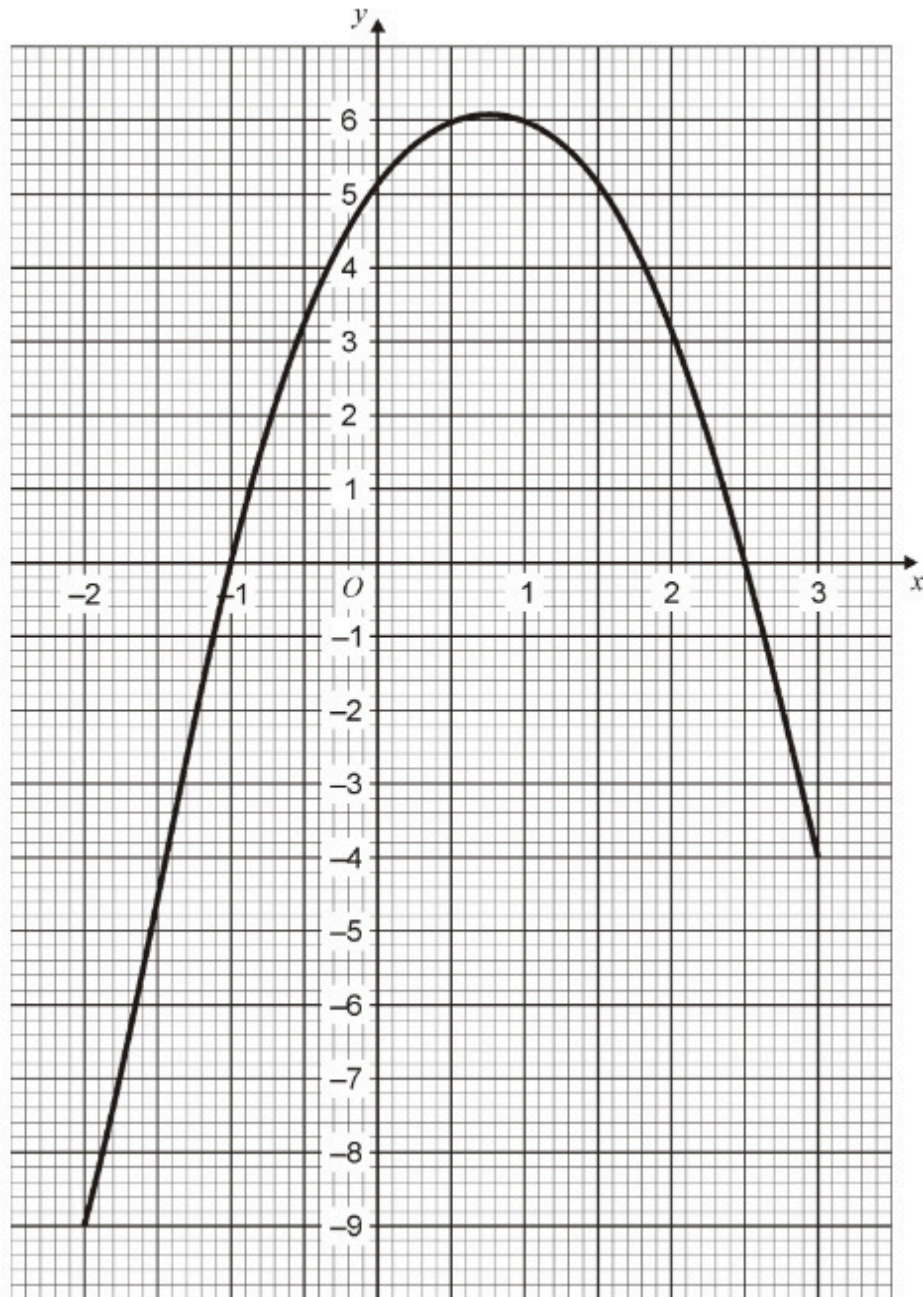
(2)

(b) On the grid below, plot the graph of  $y = x^3 + 4$  for values of  $x$  from -2 to 2



(2)

(c) The graph of  $y = 5 + 3x - 2x^2$  is shown for values of  $x$  from  $-2$  to  $3$



Write down the solutions of  $5 + 3x - 2x^2 = 0$

Answer \_\_\_\_\_ and \_\_\_\_\_

(2)

(Total 6 marks)