

Non-Calculator

Q1.

(a) Factorise $x^2 - 100$

Answer -----

(1)

(b) Solve $7x + 6 > 1 + 2x$

Answer -----

(2)

(Total 3 marks)

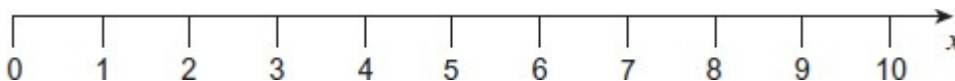
Q2.

(a) Solve $4x - 7 \leq 13$

Answer -----

(2)

(b) Show $3 < x \leq 8$ on the number line.



(2)

(Total 4 marks)

Q3.

- (a) Show the inequality $x > -2$ on the number line.



(1)

- (b) Solve the inequality $3x + 5 \leq 11$

Answer -----

(2)

(Total 3 marks)

Q4.

- (a) Solve $4(x + 3) = 17$

Answer $x =$ -----

(3)

- (b) Solve the inequality $2n - 1 > 5$

Answer -----

(2)

(Total 5 marks)

Q5.

n is an integer.

List the values of n such that $-12 < 3n \leq 6$

Answer -----

(Total 2 marks)

Q6.

$6 \leq 2n$ List the possible integer values of n .

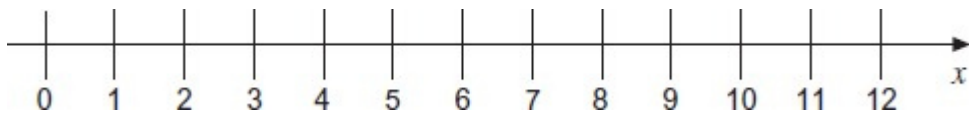
Answer _____
(Total 3 marks)

Q7.

(a) Solve $5x - 11 \geq 29$

Answer _____
(2)

(b) Show the solution of $3x < 12$ on the number line.



(2)
(Total 4 marks)

Q8.

Solve $3x - 5 > 13$

Answer _____
(Total 2 marks)

Calculator

Q9.

Work out the greatest integer value of x that satisfies the inequality $3x + 11 < 1$

Answer _____

(Total 2 marks)

Q10.

w is an integer such that $6 \leq 3w < 18$

x is an integer such that $-4 \leq x \leq 3$

(a) Work out all the possible integer values of w .

Answer _____

(3)

(b) Write down the highest possible value of x^2

Answer _____

(1)

(c) Work out the lowest possible value of $w - x$

Answer _____

(2)

(Total 6 marks)

Q11.

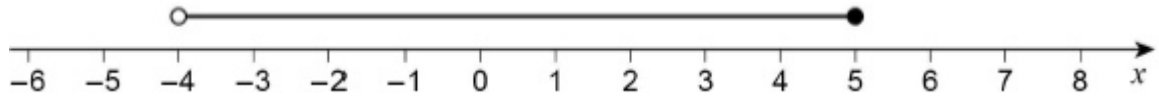
Solve $5d - 3 > d + 17$

Answer _____

(Total 2 marks)

Q12.

Circle the inequality shown by the diagram.



$-4 \leq x < 5$

$-4 \leq x \leq 5$

$-4 < x < 5$

$-4 < x \leq 5$

(Total 1 mark)

Q13.

Solve $20 + w < 3(w + 2)$

Answer _____

(Total 3 marks)

Q14.

(a) Solve $5x - 2 < 6$

Answer _____

(2)

(b) List the whole number values of n that satisfy $1.5 < n \leq 6$

Answer _____

(2)

(Total 4 marks)